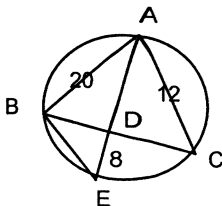


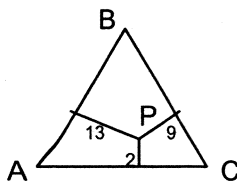
GEOMETRY

1. The bisector of $\angle A$ of $\triangle ABC$ intersects the circumcircle of $\triangle ABC$ at E, and \overline{AE} intersects \overline{BC} at D. If $AB = 20$, $AC = 12$, and $DE = 8$, what is the length of \overline{AD} ?



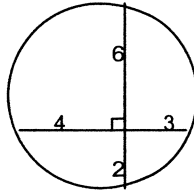
2. An equilateral triangle of perimeter 6 sits atop a square of perimeter 8, and the two share a side in common. Line segments of length x connect the two vertices of the square that aren't also vertices of the triangle to the vertex of the triangle that isn't also a vertex of the square. What is the value of x ?
Express your answer in the form $\sqrt{a} + \sqrt{b}$, where a and b are integers.
3. What is the numerical value of b for which the length of the path from $A(0, 2)$ to $B(b, 0)$ to $C(c, 10)$ to $D(5, 9)$ will be a **minimum**? Express your answer as a fraction in simplest form.
[HINT, since the shortest distance between *two* points is a straight line segment, draw $\overline{A'BCD'}$, such that its length is equal to the path \overline{AB} to \overline{BC} to \overline{CD} .]

4. P is a point in the interior of **equilateral** triangle ABC , such that perpendicular segments from P to each of the sides of $\triangle ABC$ measure 2 inches, 9 inches and 13 inches. Find the number of square inches in the area of $\triangle ABC$, and express your answer in simplest radical form.

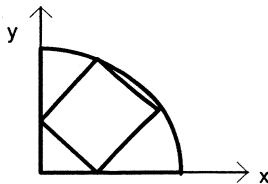


5. Quadrilateral Q has an inscribed circle. If the lengths of 3 consecutive sides of Q are 13, 14, and 15, what is the perimeter of Q ? Express your answer in simplest form.
6. Find the area of the convex quadrilateral formed by connecting the points of intersection of the graphs of $xy = 20$ and $x^2 + y^2 = 41$.
Express your answer in simplest form.
7. The lengths of the bases of trapezoid T are 8 and 18. If the lower base angles of trapezoid T are complementary, what is the distance between the midpoints of the upper and lower bases of T ? Express your answer in simplest form
Hint: Draw segments parallel to the legs.

8. A circle passes through point $A(3, 4)$ and point $B(6, 8)$ and is tangent to the x axis at point $C(k, 0)$. Find k and express in simplest radical form.
(Hint: extend chord \overline{AB} .)
9. Two perpendicular chords intersect in circle O . The lengths of the segments of the longer chord are 6 and 2, while the lengths of the shorter chord are 4 and 3. Find the length of the diameter of circle O , and express it in simplest radical form.



10. Given $\triangle ABC$ with $AB = 14$, $BC = 15$, $AC = 13$. The length of the shortest altitude is $\frac{56}{5}$. Find the sum of the lengths of the two longer altitudes of $\triangle ABC$ in simplest form.
11. Given $\triangle ABC$, $AC = 10$, $BC = 12$. D is on \overline{AB} , such that $\overline{CD} \perp \overline{AB}$. Point E lies on \overline{CD} , such that $AE = 4$, $EB = x$. Compute x .
12. The lengths of the diagonals of a rhombus are 16 and 30. Compute the length of an altitude drawn from a vertex to the opposite side.
13. As shown in the diagram below, a square is inscribed in a quadrant of a circle with a radius of 5 inches. Find the number of square inches in the area of the square. Express your answer in simplest form.



Solutions:

1).

AD = x, Triangles ACD and AEB are similar so
 $x : 20 = 12 : x + 8$
 $x^2 + 8x - 240 = 0$
 $(x - 12)(x + 20) = 0$
 $x = 12$ reject $x = -20$

2.

$AC^2 = 2^2 + 2^2 - 2 \cdot 2 \cdot 2 \cos 150^\circ$
 $= 4 + 4 - 8 \left(-\frac{\sqrt{3}}{2} \right) = 8 + 4\sqrt{3}$
 $AC = \sqrt{8 + 4\sqrt{3}} = \sqrt{8 + 2\sqrt{12}} = \sqrt{6 + 2 + 2\sqrt{6} \cdot 2}$
 $AC = \sqrt{6} + \sqrt{2}$ Note: $(\sqrt{6} + \sqrt{2})^2 = \sqrt{6}^2 + 2\sqrt{6}\sqrt{2} + \sqrt{2}^2 = 6 + 2\sqrt{12} + 2 = 8 + 4\sqrt{3} = AC^2$

3

By reflections, the length of $\overline{A'BCD'}$ is equal to the length of the path \overline{AB} to \overline{BC} to \overline{CD} .
 $\Delta A'OB \sim \Delta A'PD'$
 So $\frac{2}{b} = \frac{13}{5}$ thus $b = \frac{10}{13}$

4)

Area triangle APB = $(1/2)(13)s$
 Area triangle BPC = $(1/2)(9)s$
 Area triangle APC = $(1/2)(2)s$
 Area triangle ABC = $(24/2)s = 12s$
 Area of an equilateral $\Delta ABC = \frac{s^2}{4}\sqrt{3} = 12s$
 So $s = 16\sqrt{3}$
 and
 Area $\Delta ABC = \frac{s^2}{4}\sqrt{3} = \frac{(16\sqrt{3})^2}{4}\sqrt{3} = 192\sqrt{3}$

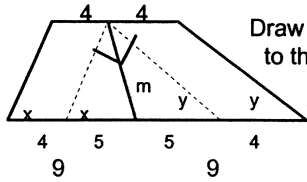
5).

A possible quadrilateral is shown
 Sides of quadrilateral Q are tangent segments to the inscribed circle.
 So $a = 7$ and $b = 7$
 Perimeter is $13 + 14 + 15 + 14 = 56$

Theorem: For any quadrilateral with an inscribed circle, the sum of the lengths of each pair of opposite sides of the quadrilateral is the same.

6) $x^2 + \left(\frac{20}{x}\right)^2 = 41$ or
 $x^2 + \frac{400}{x^2} = 41$
 So $x^4 - 41x^2 + 400 = 0$ or
 $(x^2 - 16)(x^2 - 25) = 0$
 Thus $x = \pm 4, x = \pm 5$ giving the solutions:
 $(4, 5), (-4, -5), (5, 4),$ and $(-5, -4)$
 These form a rectangle, whose dimensions are:
 $d_{(5,4)(4,5)} = \sqrt{(5-4)^2 + (4-5)^2} = \sqrt{2}$
 $d_{(5,4)(-4,-5)} = \sqrt{(5-(-4))^2 + (4-(-5))^2} = \sqrt{162}$
 The area is therefore $(\sqrt{2})(\sqrt{162}) = \sqrt{324}$ or 18

7).

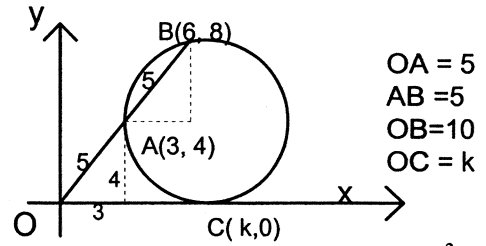


Draw segments parallel to the legs as shown.

A triangle is formed

Since the base angles are complementary, $x + y = 90$, so the triangle formed is a rt Δ and the line joining the midpoints of the bases is also the median to the hypotenuse of this right triangle. Thus segment m is 5 since the length of the median of a rt. $\Delta = \frac{1}{2}$ of the hypotenuse so it is $\frac{1}{2}(10) = 5$

8.



Since (secant)(external segment) = (tangent)²

$$(OB)(OA) = (OC)^2$$

$$k^2 = (10)(5) = 50,$$

$$k = 5\sqrt{2}$$

9.). From center O, draw \perp segments to chords \overline{AB} and \overline{CD} .

So

CE = ED = 3.5, AF = FB = 4.

Thus EG = 3.5 - 3 = 0.5

Since EG = OF, OF = 0.5

Also FG = OE = 4 - 2 = 2

$$(AO)^2 = \left(\frac{1}{2}\right)^2 + 4^2$$

$$(AO)^2 = \left(\frac{1}{4}\right) + 16 = 65/4$$

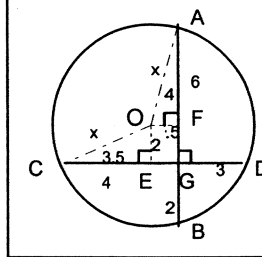
$$\text{So } AO = \sqrt{65}/2$$

Thus the Diameter = $2(AO) = \sqrt{65}$

Alternatively: $(CO)^2 = \left(\frac{7}{2}\right)^2 + 2^2$;

$(CO)^2 = \left(\frac{49}{4}\right) + 4 = 65/4$, and thus $CO = \sqrt{65}/2$,

Diameter = $2(CO) = \sqrt{65}$



10). The area of the $\Delta = \frac{1}{2}bh$

So $\frac{1}{2}(15)(56/5) = \frac{1}{2}(h_2)(14) = \frac{1}{2}(h_3)(13)$

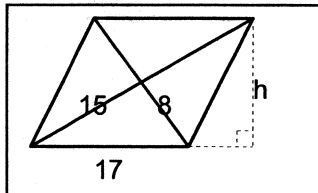
$$84 = \frac{1}{2}(h_2)(14) \quad \text{and} \quad 84 = \frac{1}{2}(h_3)(13)$$

$$h_2 = 12 \qquad h_3 = \frac{168}{13}$$

$$\text{Thus } h_2 + h_3 = 12 + \frac{168}{13}$$

$$= \frac{156}{13} + \frac{168}{13} = \frac{324}{13}$$

12.



Since the diagonals of a rhombus bisect each other and are \perp , we have an 8, 15, 17 rt. Δ . Thus the sides of the rhombus are 17. The area of the rhombus = $\frac{1}{2}d_1 \cdot d_2 = \frac{1}{2}(30)(16) = 240$

and The area of the rhombus = $bh = 17h$

$$\text{So } 17h = 240 \quad \text{and} \quad h = \frac{240}{17}$$

11. Using the Pythagorean Thm:

$$10^2 - w^2 = 12^2 - y^2$$

and

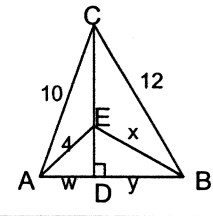
$$4^2 - w^2 = x^2 - y^2$$

Subtracting these equations, we get

$$10^2 - 4^2 = 12^2 - x^2$$

So $x^2 = 60$

$$x = \sqrt{60} = 2\sqrt{15}$$



13. Area of the square = s^2

Since the inscribed figure is a square of side s , the coordinates of P, a vertex of the square (Notice, in locating P, two congruent isosceles right triangles are formed.)

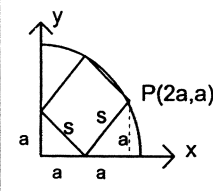
Since the radius of circle is 5, and P is on the circle whose equation is $x^2 + y^2 = 5^2$

we get $(2a)^2 + (a)^2 = 5^2$ or $4a^2 + a^2 = 25$

$$5a^2 = 25 \quad \text{so} \quad a^2 = 5 \quad \text{and so} \quad a = \sqrt{5}$$

Since $s = a\sqrt{2}$ the area of the square, $s^2 = (a\sqrt{2})^2 = 2a^2$.

Thus the square's area is $2(5) = 10$



EXTRA ON QUESTION #2

Solving we get:

$$AC^2 = 2^2 + 2^2 - 2 \cdot 2 \cdot 2 \cos 150^\circ$$

$$= 4 + 4 - 8 \left(-\frac{\sqrt{3}}{2} \right) = 8 + 4\sqrt{3}$$

$$AC = \sqrt{8 + 4\sqrt{3}}$$

EASY!

BUT HOW DO WE GET OUR ANSWER IN THE DESIRED FORM?

Express your answer in the form $\sqrt{a} + \sqrt{b}$, where a and b are integers.

WORKS BACKWARDS (ALWAYS A VIABLE STRATEGY) FROM THE DESIRED FORM UNTIL YOU SEE A CONNECTION!

	<u>Desired</u>	<u>Ours</u>	<u>Connection</u>
AC =	$\sqrt{a} + \sqrt{b}$	$AC = \sqrt{8 + 4\sqrt{3}}$?
(AC) ² =	$(\sqrt{a} + \sqrt{b})^2$	$(AC)^2 = 8 + 4\sqrt{3}$?
=	$(\sqrt{a})^2 + 2\sqrt{a}\sqrt{b} + (\sqrt{b})^2$		
=	$a + 2\sqrt{ab} + b$	$= 8 + 2\sqrt{12}$	YES! $a+b = 8, ab = 12$

So our desired a and b values must be 6 and 2

And $AC = \sqrt{6} + \sqrt{2}$

Note: $(\sqrt{6} + \sqrt{2})^2 = \sqrt{6}^2 + 2\sqrt{6}\sqrt{2} + \sqrt{2}^2 = 6 + 2\sqrt{12} + 2 = 8 + 4\sqrt{3} = AC^2$

Try another:

Express $\sqrt{13 + 4\sqrt{10}}$ in the form $\sqrt{a} + \sqrt{b}$, where a and b are integers.

